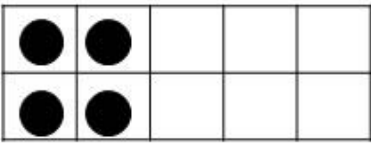
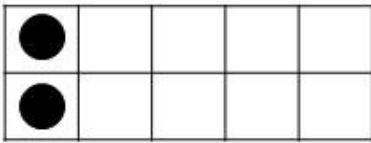
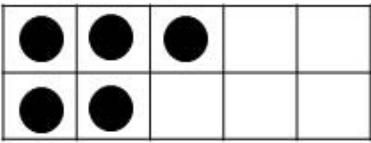
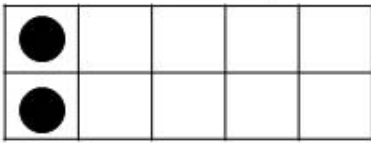
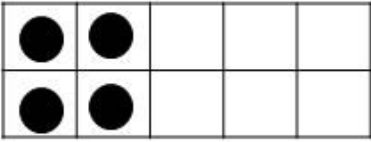
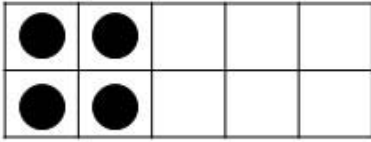
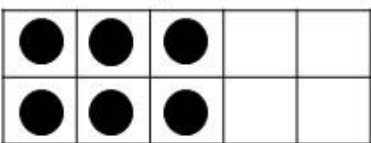
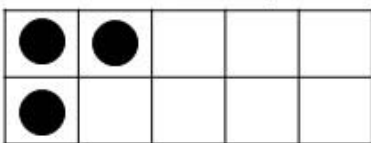


Name: _____

Ten Frame

Instructions Count the dots in each ten frame and write the total number to solve the problem.

$\underline{\quad}$ 	+	$\underline{\quad}$ 	=	<input style="width: 50px; height: 40px;" type="text"/>
$\underline{\quad}$ 	+	$\underline{\quad}$ 	=	<input style="width: 50px; height: 40px;" type="text"/>
$\underline{\quad}$ 	+	$\underline{\quad}$ 	=	<input style="width: 50px; height: 40px;" type="text"/>
$\underline{\quad}$ 	+	$\underline{\quad}$ 	=	<input style="width: 50px; height: 40px;" type="text"/>

objective achieved?  