
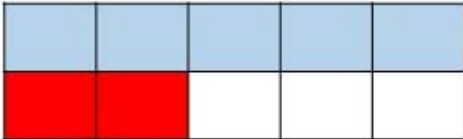

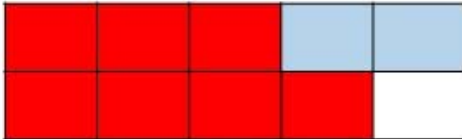



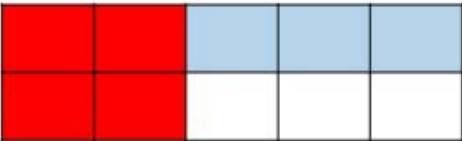

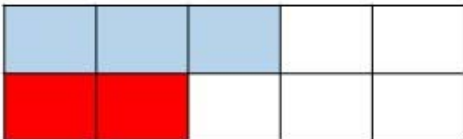



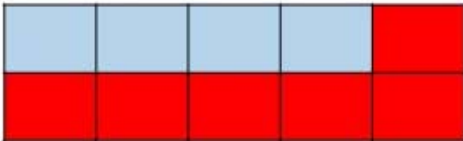

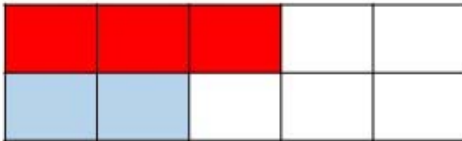


answers

Ten Frame

Instructions Look at the problem and then fill in the ten boxes to find the answer. Color in the boxes.

 $5 + 2 = \boxed{7}$ 	 $7 + 2 = \boxed{9}$ 
 $4 + 4 = \boxed{8}$ 	 $4 + 3 = \boxed{7}$ 
 $3 + 2 = \boxed{5}$ 	 $3 + 1 = \boxed{4}$ 
 $4 + 6 = \boxed{10}$ 	 $3 + 2 = \boxed{5}$ 

objective achieved?

