


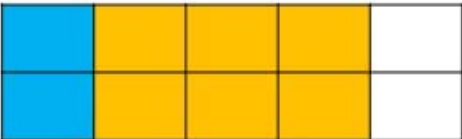






answers

Ten Frame

Instructions Look at the problem and then fill in the ten boxes to find the answer. Color in the boxes.

$\boxed{A} \quad 3 + 6 = \boxed{9}$ 	$\boxed{B} \quad 3 + 3 = \boxed{6}$ 
$\boxed{C} \quad 4 + 5 = \boxed{9}$ 	$\boxed{D} \quad 2 + 6 = \boxed{8}$ 
$\boxed{E} \quad 3 + 4 = \boxed{7}$ 	$\boxed{F} \quad 3 + 2 = \boxed{5}$ 
$\boxed{G} \quad 5 + 5 = \boxed{10}$ 	$\boxed{H} \quad 4 + 2 = \boxed{6}$ 

objective achieved?

