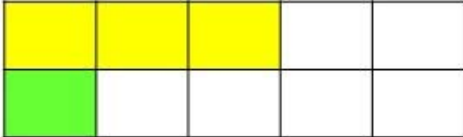

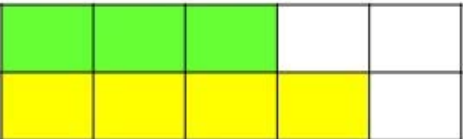
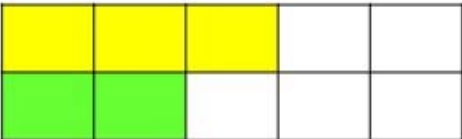
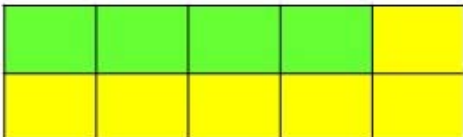
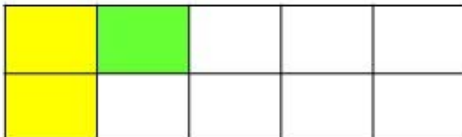
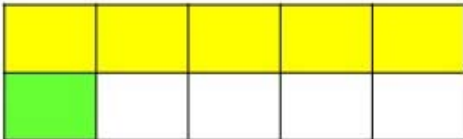



# answers

## Ten Frame

**Instructions** Look at the problem and then fill in the ten boxes to find the answer. Color in the boxes.

<b>A</b> $3 + 1 =$ <b>4</b> 	<b>B</b> $3 + 5 =$ <b>8</b> 
<b>C</b> $3 + 4 =$ <b>7</b> 	<b>D</b> $3 + 2 =$ <b>5</b> 
<b>E</b> $4 + 6 =$ <b>10</b> 	<b>F</b> $2 + 1 =$ <b>3</b> 
<b>G</b> $5 + 1 =$ <b>6</b> 	<b>H</b> $1 + 1 =$ <b>2</b> 

objective achieved?

