
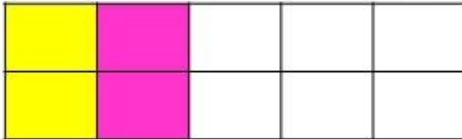
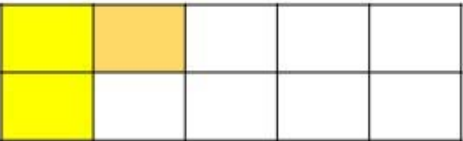
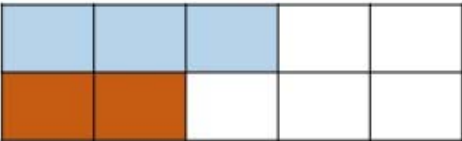
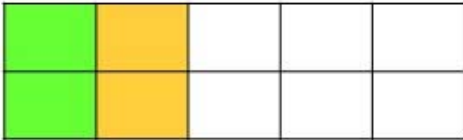
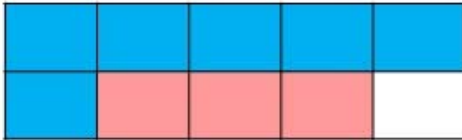




answers

Ten Frame

Instructions Look at the problem and then fill in the ten boxes to find the answer. Color in the boxes.

<p>(A) $3 + 4 =$ 7</p> 	<p>(B) $2 + 2 =$ 4</p> 
<p>(C) $2 + 1 =$ 3</p> 	<p>(D) $3 + 2 =$ 5</p> 
<p>(E) $2 + 2 =$ 4</p> 	<p>(F) $6 + 3 =$ 9</p> 
<p>(G) $5 + 3 =$ 8</p> 	<p>(H) $4 + 2 =$ 6</p> 

objective achieved?

