

answers

Ten Frame

Instructions Look at each box with the ten spaces. Count how many pictures are inside the box and then write the number that corresponds to the number you counted.



5




6



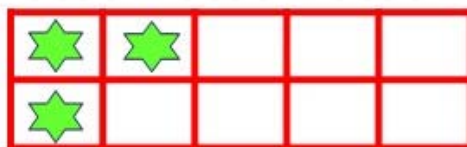
4



7




8



3



9



2

objective achieved?

