


Name \_\_\_\_\_

## Monster Mash Area Models Answer Key

Find the value of every symbol by using area model multiplication.

1.



$= 800$



$= 20$




$= 240$



$= 6$

2.



$= 30$



$= 200$




$= 1500$



$= 210$

3.



$= 2400$



$= 8$




$= 2$



$= 16$

4.



$= 70$



$= 350$



$= 5$



$= 60$