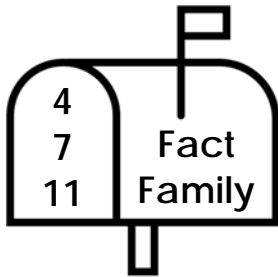


Name _____

Addition & Subtraction Fact Families Mailboxes Answers

Complete all the addition and subtraction fact families using the integers in each mailbox.

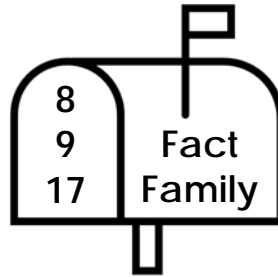


$$4 + 7 = 11$$

$$7 + 4 = 11$$

$$11 - 4 = 7$$

$$11 - 7 = 4$$

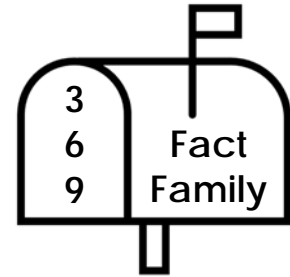


$$9 + 8 = 17$$

$$8 + 9 = 17$$

$$17 - 9 = 8$$

$$17 - 8 = 9$$

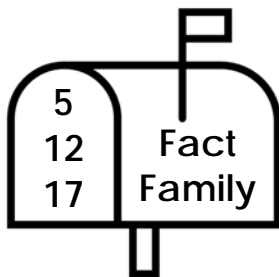


$$6 + 3 = 9$$

$$3 + 6 = 9$$

$$9 - 6 = 3$$

$$9 - 3 = 6$$

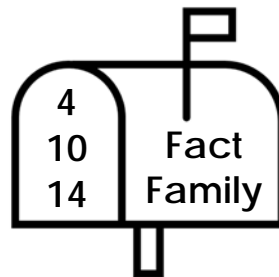


$$12 + 5 = 17$$

$$5 + 12 = 17$$

$$17 - 12 = 5$$

$$17 - 5 = 12$$

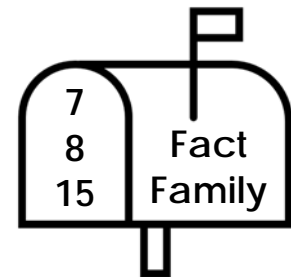


$$10 + 4 = 14$$

$$4 + 10 = 14$$

$$14 - 10 = 4$$

$$14 - 4 = 10$$



$$8 + 7 = 15$$

$$7 + 8 = 15$$

$$15 - 7 = 8$$

$$15 - 8 = 7$$