

Name _____

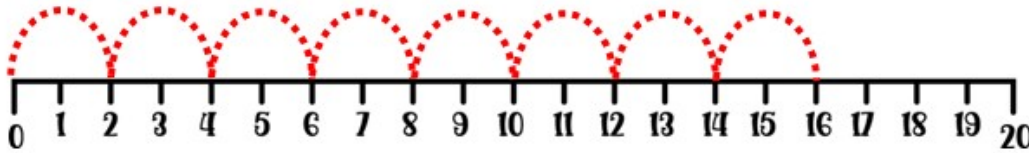
answers

Division on a Number Line

A

Instructions: "Draw jumps of 2 on the number line from 0 to 14. Write how many jumps you made and the result of the division."

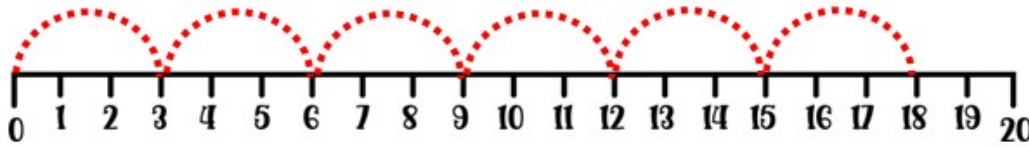
answer: 8



B

Instructions: "Draw jumps of 3 on the number line from 0 to 18. Write how many jumps you made and the result of the division."

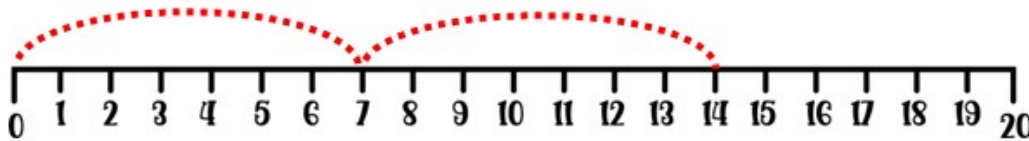
answer: 6



C

Instructions: "Draw jumps of 7 on the number line from 0 to 14. Write how many jumps you made and the result of the division."

answer: 2



objective achieved?

