

Name \_\_\_\_\_

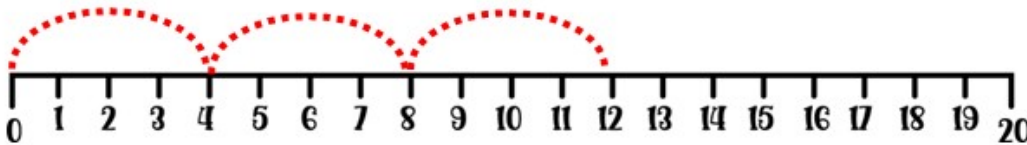
# answers

## Division on a Number Line

A

**Instructions:** "Draw jumps of 4 on the number line from 0 to 12. Write how many jumps you made and the result of the division."

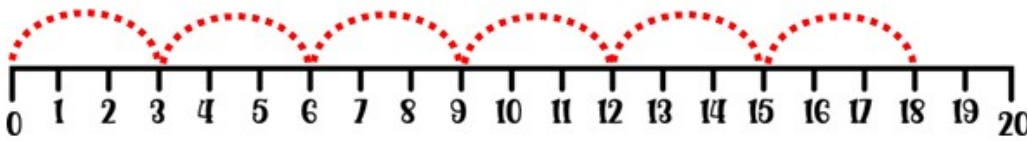
answer: 3



B

**Instructions:** "Draw jumps of 3 on the number line from 0 to 18. Write how many jumps you made and the result of the division."

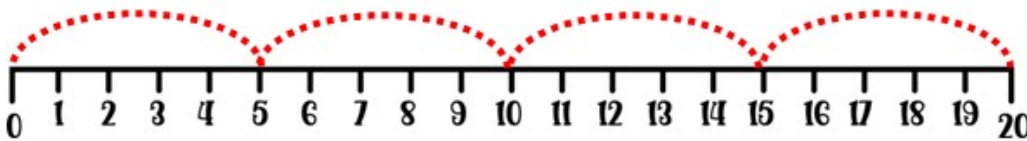
answer: 6



C

**Instructions:** "Draw jumps of 5 on the number line from 0 to 20. Write how many jumps you made and the result of the division."

answer: 4



objective achieved?

