

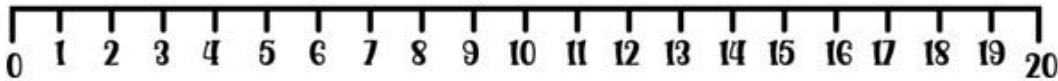
Name \_\_\_\_\_

# Division on a Number Line



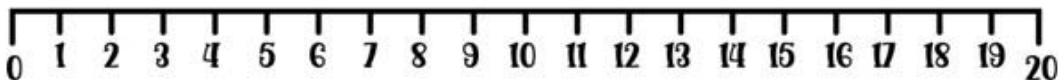
**Instructions:** "Draw jumps of 4 on the number line from 0 to 12. Write how many jumps you made and the result of the division."

answer: \_\_\_\_\_



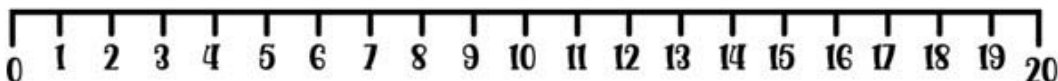
**Instructions:** "Draw jumps of 3 on the number line from 0 to 18. Write how many jumps you made and the result of the division."

answer: \_\_\_\_\_



**Instructions:** "Draw jumps of 5 on the number line from 0 to 20. Write how many jumps you made and the result of the division."

answer: \_\_\_\_\_



objective achieved?

