

Name \_\_\_\_\_

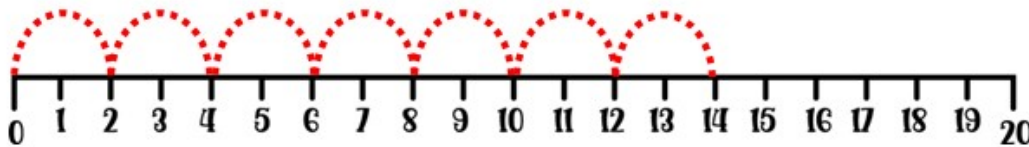
# answers

## Division on a Number Line



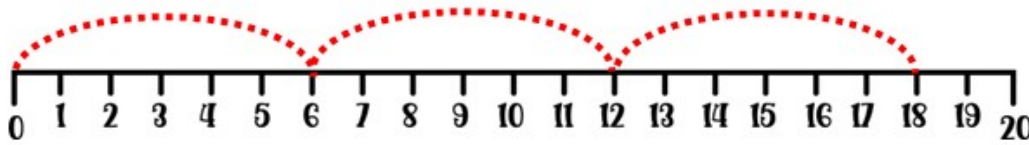
**Instructions:** "Draw jumps of 2 on the number line from 0 to 14. Write how many jumps you made and the result of the division."

answer: 7



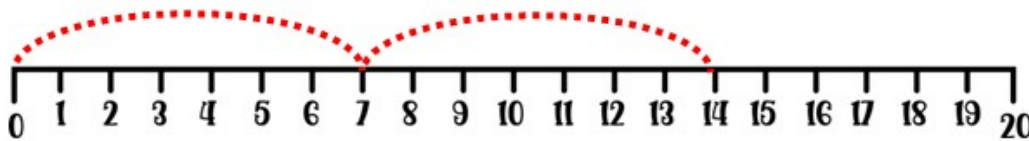
**Instructions:** "Draw jumps of 6 on the number line from 0 to 18. Write how many jumps you made and the result of the division."

answer: 3



**Instructions:** "Draw jumps of 7 on the number line from 0 to 14. Write how many jumps you made and the result of the division."

answer: 2



objective achieved?

