

Name _____

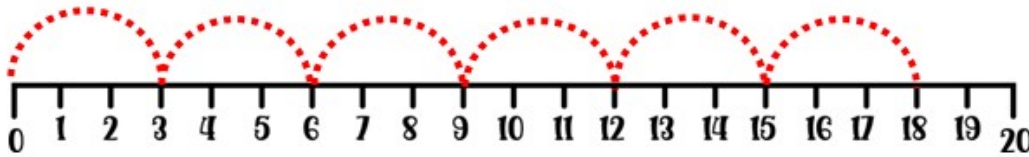
answers

Division on a Number Line

A

Instructions: "Draw jumps of 3 on the number line from 0 to 18. Write how many jumps you made and the result of the division."

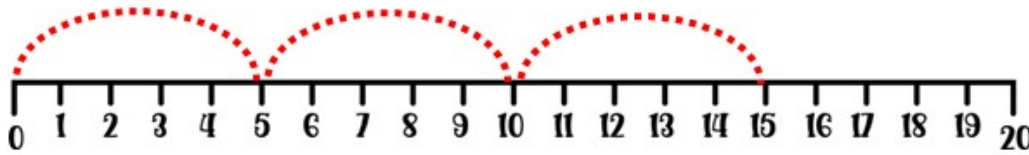
answer: 6



B

Instructions: "Draw jumps of 5 on the number line from 0 to 15. Write how many jumps you made and the result of the division."

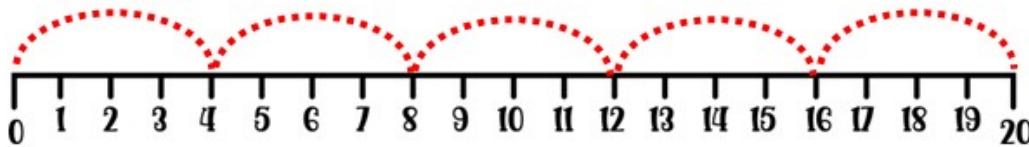
answer: 3



C

Instructions: "Draw jumps of 4 on the number line from 0 to 20. Write how many jumps you made and the result of the division."

answer: 5



objective achieved?

