

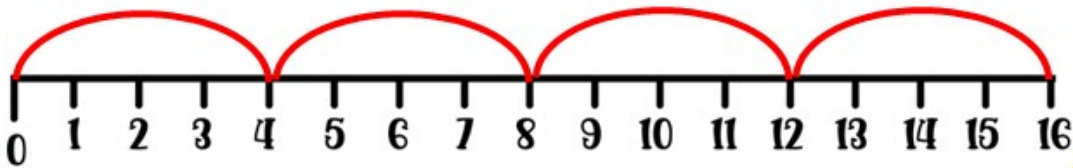
Name _____

answers

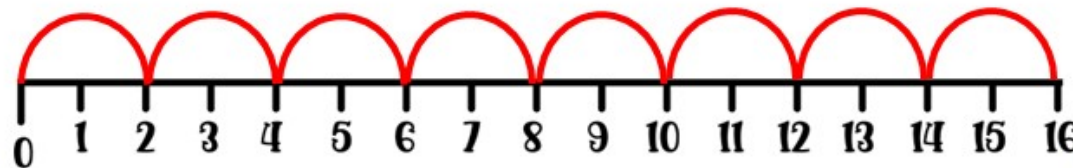
Division on a Number Line

Instructions: "Look at the jumps on the number line and write how the division is done."


■ $16 \div 4 : \underline{4}$



■ $16 \div 2 : \underline{8}$



■ $16 \div 8 : \underline{2}$



objective achieved?

