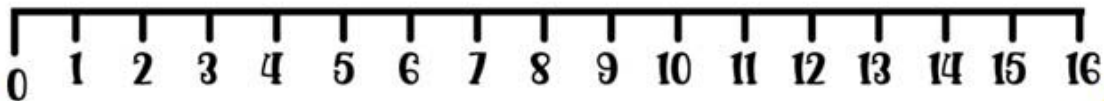


Name _____

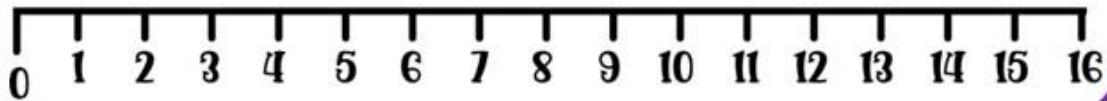
Division on a Number Line

Instructions: "Look at the jumps on the number line and write how the division is done."

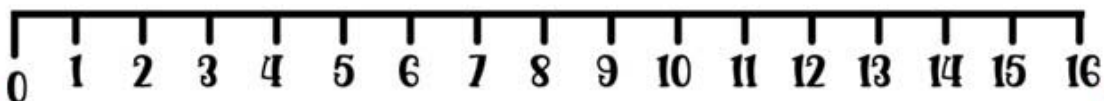
■ $16 \div 4$: _____



■ $16 \div 2$: _____



■ $16 \div 8$: _____



objective achieved?

