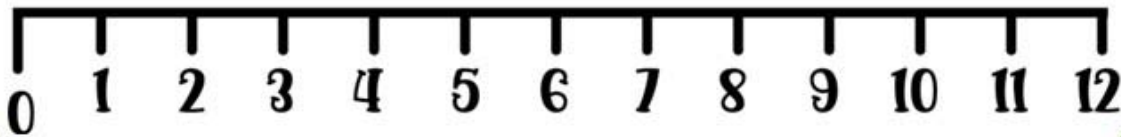


Name _____

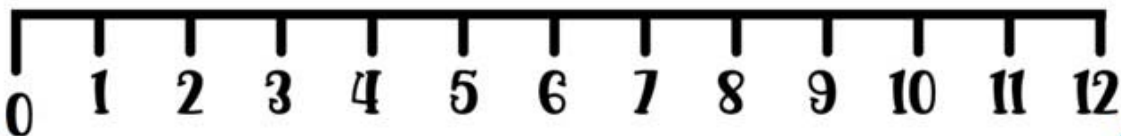
Division on a Number Line

Instructions: "Look at the jumps on the number line and write how the division is done."

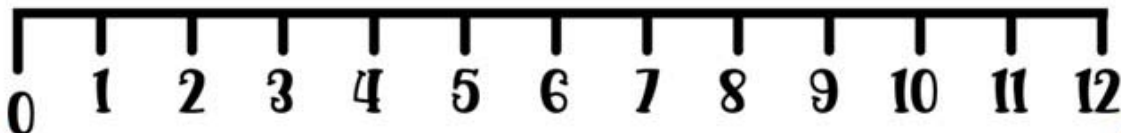
■ $12 \div 2 : \underline{\hspace{2cm}}$



■ $12 \div 4 : \underline{\hspace{2cm}}$



■ $12 \div 3 : \underline{\hspace{2cm}}$



objective achieved?

