

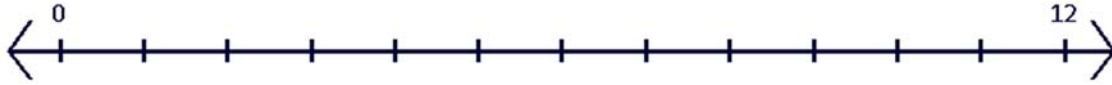
Name _____



Repeated Subtraction Number Line

Use the number line to help you solve each problem.

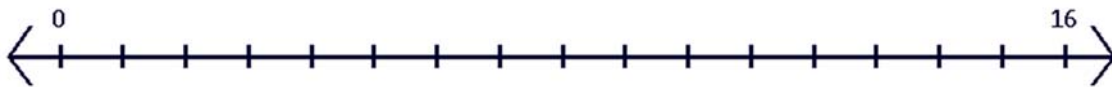
1. $12 \div 2 =$



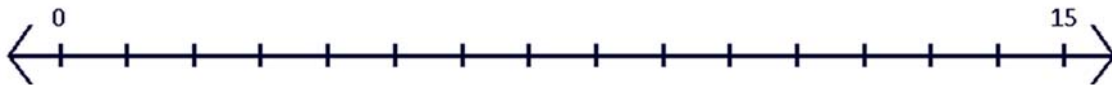
2. $18 \div 3 =$



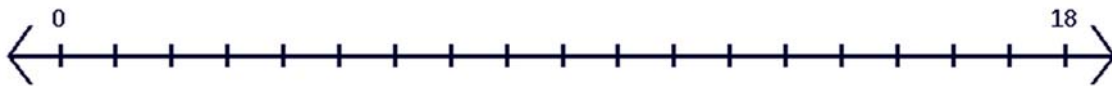
3. $16 \div 4 =$



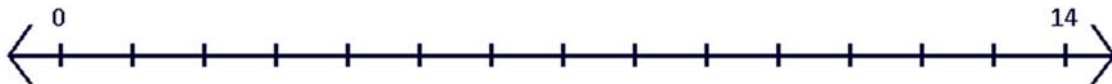
4. $15 \div 5 =$




5. $18 \div 6 =$



6. $14 \div 2 =$



7. $21 \div 7 =$



8. $24 \div 8 =$



9. $18 \div 9 =$

