



Name _____



Puppy Pound Sums Answer Key



Choose the number that represents the total number of puppies in each row.

 +  6, 7, 8,
9, 10, 11

 +  3, 4, 5,
6, 7, 8

 +  7, 8, 9,
10, 11, 12

 +  6, 7, 8,
9, 10, 11

 +  3, 4, 5,
6, 7, 8