

Name _____

Shape Number Sentences Answer Key

Look at the groups of things. Find the number sentence (addition problem) that shows the same numbers. Draw a line to match them together.




+




3 + 5 = 8



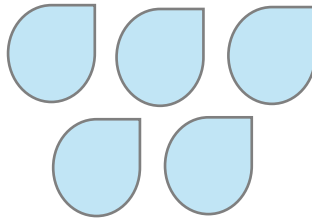
+



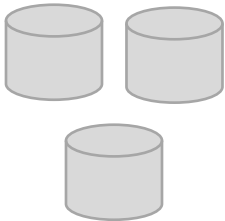
4 + 3 = 7




+



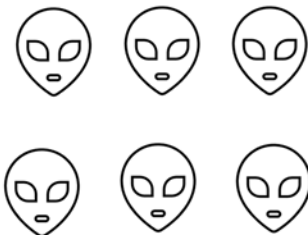
6 + 5 = 11




+



6 + 2 = 8



+



5 + 5 = 10